

SECTION A: 40 MARKS

Answer **all** the questions in this section

Questions **1** to **20** carry two marks each

1. Subtract:

$$\begin{array}{r} 160 \\ -26 \\ \hline \\ \hline \end{array}$$

2. Round off 89.96 to the nearest one place of decimal.

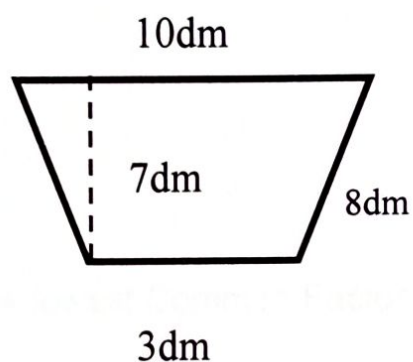
3. Express 1650 hours to 12-hour clock system.

4. How many 350ml bottles can be obtained from a 14litre container?

5. Find the next number in the sequence below:

81, 27, 9, 3, _____

6. Calculate the area of the figure below



7. Reduce sh.240,000 by 20%

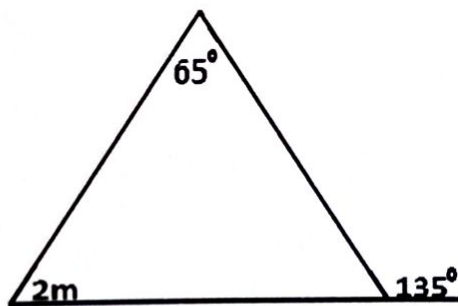
8. Solve for m : $5^{3m} \div 125 = 1$

9. Simplify: $72 \div 8 \times 3$

10. Find the distance round a circular garden of diameter 100m ($\pi=3.14$)

11. Find the lowest Common Factor (L.C.F) of 12 and 18

12. Find the value of m in the figure below.



13. A school bursar issued receipt numbered consecutively from 901 to 950. If each receipt was issued for 20,000. How much did he collect altogether?

14. Expand 294.63 using powers of ten

15. Solve for P: $\frac{p}{4} + 3 = 6$

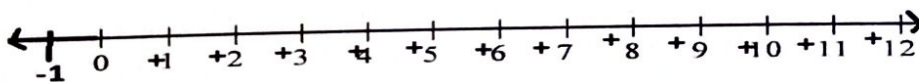
16. Using a ruler, a pencil and a pair of compass, construct an angle of 105°

17. Given that $P = \{a, b, c, d, e, f\}$ and $K = \{a, e, i, o, u, y\}$.

Find $n(P)^1$

18. Simplify: $\frac{2}{3} - \frac{3}{4} + \frac{1}{2}$

19. Using the number line below work out 3×4

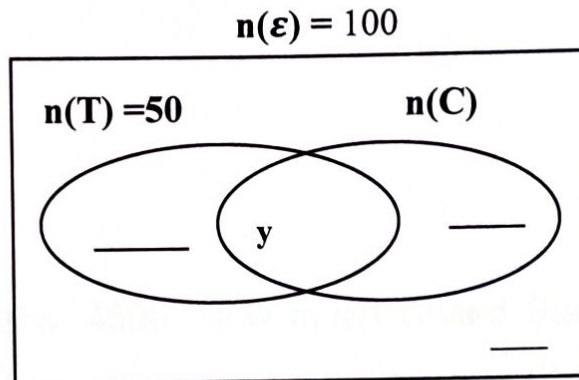


20. The perimeter of a rectangle is 44m. if its width is 9m. find its length.

SECTION B: 60 MARKS

21. In a class of 100 pupils, 50 like Tea (T), $y + 12$ like coffee only, y like both Tea and Coffee while 18 like neither of the two drinks.

- (a) Use the information given above to complete the Venn diagram below. (3marks)



- (b) How many pupils like coffee altogether? (2 marks)

22. The exchange rates at a forex bureau are given as follows.

US\$1 costs Ug sh 3000

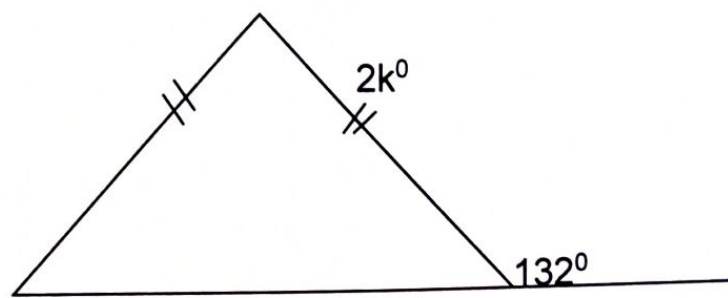
K sh 1 costs Ug sh 30

- a) A trader has US \$ 1450. How much Uganda shillings does he have?
(2 marks)

- b) A radio costs Kshs. 4500. How much United States dollars does the same radio cost?
(3 marks)

23. a) The complement of $2K - 30^\circ$ is 50° , find the value of K. (2 marks)

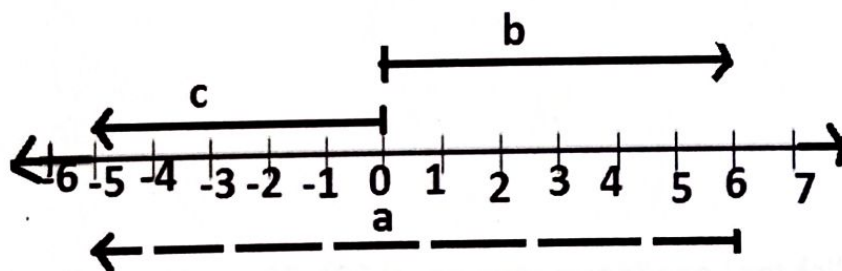
b) Study the diagram below carefully and answer questions about it.



Find the value of k

(3 marks)

24. Study the number line below and use it to answer questions that follow.



a) Write integers represented by;

A..... (1 mark)

b..... (1 mark)

c..... (1 mark)

- b) Write the mathematical sentence represented on the number line.
(2 marks)

25.(a) Solve: $-15 \leq 3y - 3 \leq 6$ (3 marks)

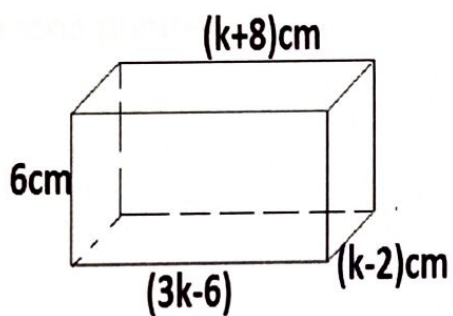
- b) Write down the solution set for inequality above. (2 marks)

26. Use the number 36.427 to answer questions that follow.

- a) What is the value of 2 (2marks)

(b) Find the product of the value of 3 and the place value of 7. (3 marks)

27. The figure below is a cuboid, use it to answer questions that follow.



a) Find the value of K (2 marks)

b). Calculate its volume. (3marks)

28. a) Find the highest number that can divide 30 and 36 without leaving a remainder. (2 marks)

b) The Lowest Common Multiple (L.C.M) of two numbers is 60 and their Greatest Common Factor (G.C.F) is 10 if the first number is 30. Find the second number. (2 marks)

29. A man spends $\frac{1}{4}$ of his salary on food, $\frac{1}{3}$ on clothing, $\frac{1}{6}$ on fees, $\frac{1}{12}$ on DSTV and banks the rest which is sh.270,000.

a) What fraction of the Salary does he bank? (3 marks)

b) How much does he earn as salary? (2marks)

30. a) With the help of a ruler, a pencil and a pair of compasses only, construct a rectangle HELP in which $HE = 8\text{cm}$ and $EL = 6\text{cm}$.
(4 marks)

b). Measure angle EHL

(1 mark)

31. A motorist takes 3 hours to cover a distance at 60km/hr but it takes only 2 hours to return through the same distance.

a) Calculate the average speed of the car for the whole journey.

(3 marks)

b) Express the average speed in (a) above in metres per second.

(2 marks)

31. A motorist takes 3 hours to cover a distance at 60km/hr but it takes only 2 hours to return through the same distance.

a) Calculate the average speed of the car for the whole journey.

(3 marks)

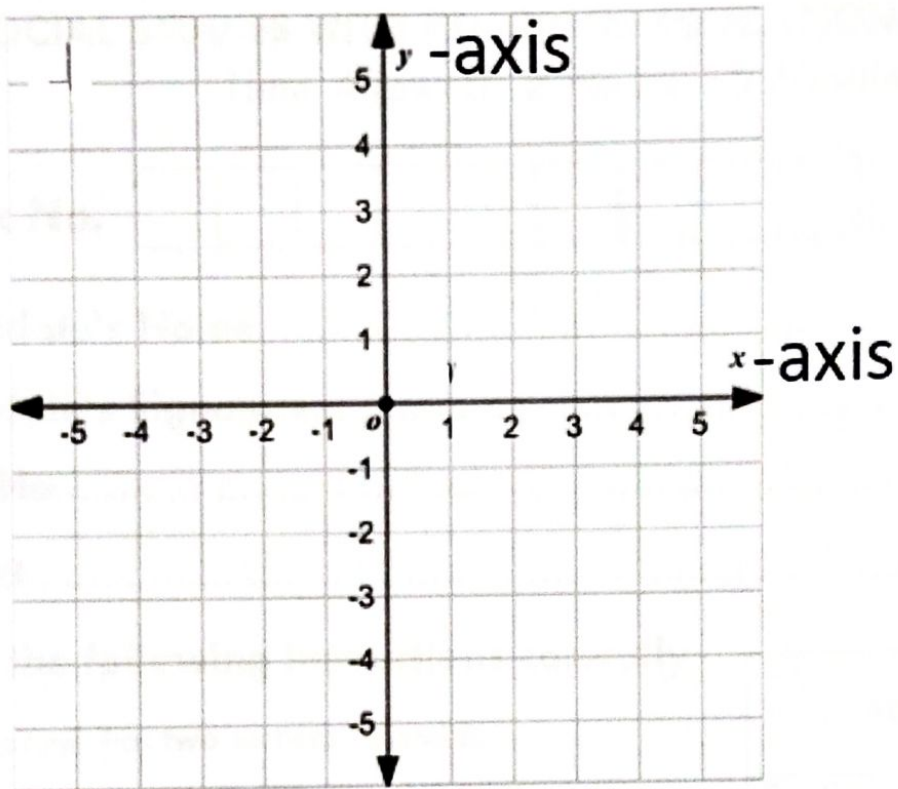
b) Express the average speed in (a) above in metres per second.

(2 marks)

32. a) Plot the following co-ordinates on the grid below.

P (-2, 3), Q (3,3), R (3, -1), S (-4, -1)

(4 marks)



b) Join P to Q, Q to R, R to S and S to P (1 mark)

c) Name the figure formed.

(1 mark)

END

SECTION A: 40 MARKS

1. Write any one duty of mid wives in our community.

.....

2. Give any one way radios promote trade in Uganda.

.....

3. State any one reason why South Africa was not a member of OAU until 1994.

.....

.....

4. State any one way a school can be useful to traders in a community.

.....

.....

5. When is a map called a sketch map?

.....

.....

6. State any one problem early man faced as he searched for food.

.....

7. How were caravans useful to traders in the pre-colonial period?

.....

.....

8. Which trading company ruled Uganda on behalf of the British?

.....

.....

9. Write any one effect of rotation of the earth.

.....

.....

10. Why is farming called an industry?
.....
.....
11. Name one example of wood fuel.
.....
12. Give one reason way Mangrove timber is used in ship building.
.....
.....
13. What is over population?
.....
.....
14. How do farmers get information about the future weather changes?
.....
.....
15. How do the people of Kapchorwa solve the problem of poor transport?
.....
.....
16. Name the centralized state that was formed in Kenya in the pre-colonial period.
.....
17. Where did the Ngoni live before migrating to East Africa?
.....
18. Give any one reason why some people use air transport instead of road transport.
.....
.....
19. Give any one duty of traffic police.
.....

20. What is the compass direction of Uganda from DRC?

.....

.....

21. Name the country where Sudanese soldiers staged a mutiny.

.....

22. Name the first colony in Africa.

.....

23. Which school symbol directs visitors to the school?

.....

24. Mention any one social challenge that has affected development of Africa.

.....

.....

25. Write any one human activity that leads to soil erosion.

.....

26. What name is given to laws made and passed by local authorities?

.....

.....

Study the diagram blow and use it to answer the questions that follow.



27. Name the road sign above.

.....

28. How is the road sign above useful to drivers?

.....
.....

29. Write any one way human activities affect wild life.

.....
.....

30. Name any one island country in Indian Ocean.

.....

31. Mention the weather which is good for winnowing cereals.

.....

32. Who were the first Europeans explorers to come to the coast of East Africa?

.....

33. Name the tax that is paid directly by civil servants in Uganda today.

.....

34. How was **IBEACO** useful to the church missionary society?

.....
.....

35. What is the role of the sergeant at army in Uganda Parliament?

.....
.....

For questions 36 – 39 answer either Christian or Islam but not both.

36. Either:

Name the feature on church that is used for identification.

.....

Or:

Name the feature on the mosque that is used for identification.

.....

37. Either:

Mention the place where righteous people will go after judgment.

.....

.....

Or: Name the place where righteous people will go according to Islam.

.....

38. Either:

Give any one way Christians show love to the sick.

.....

.....

Or: Give any one way Muslims show love to the sick.

.....

.....

39. Either:

Name the Christian event that reminds Christians of the last supper.

.....

Or:

Name the Islamic event that marks the end of Ramadan.

.....

40. Either:

Who was the leader of the church missionary society in Uganda?

.....

Or:

Who was the leader of the first Arab traders to Uganda?

.....

SECTION B: 60 MARKS

- 41.** (a) Why did some African Kings and Chiefs resist colonial rule?

.....
.....

- (b) State any two effects of resistance to colonial rule in East Africa.

i).....

.....

ii)

.....

- (c) Name the method of colonial rule that colonialists used to reduce resistance to colonial rule in East Africa.

.....

- 42.** (a) Which climatic zone in Africa has many forests?

.....

- (b) Write any two problems faced by people who live in forested areas.

i).....

.....

ii)

.....

- (c) How are forests important to herbalists?

.....

.....

- 43.** (a) Name any one member state of **EAC** located in the Southern hemisphere.

.....

.....

(b) What is the law making body of **EAC**?

.....
.....

(d) State any two ways **EAC** has solved some of the challenges facing her member states.

i)
ii)

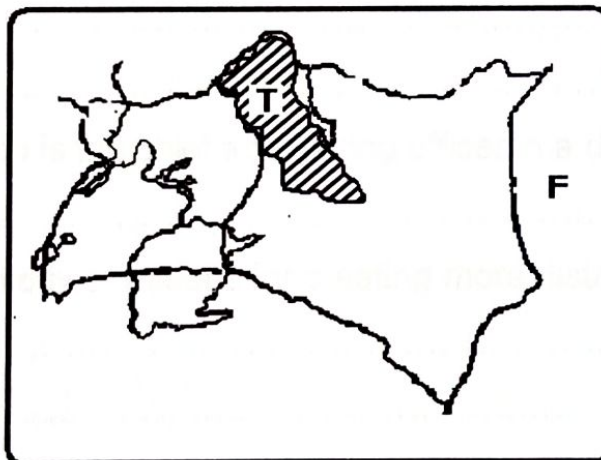
44. (a) Mention any two water resources in Africa.

i)
ii)

(b) Give any two reasons why some water sources are not fully exploited in Africa.

i)
ii)

45. Study the map below and use it to answer the questions that follow.



(a) Name the country marked **F**.

.....

- (b) Write any one factor that has led to sparse population in the area marked T on the map.

.....
.....

- (c) Compare Uganda and country marked F in terms of their location.

.....
.....

- (d) Using letter D, show port Kisumu on the map above.

46. (a) Mention the system of government that is used in Uganda today.

.....

- (b) How does a democratic government come into power?

.....
.....

- (c) Apart from election, mention any two other ways democracy is practiced in Uganda

.....
.....

47. (a) Who is the chief accounting officer in a district?

.....

- (b) Give two reasons for creating more districts in Uganda.

i).....

ii)

- (d) Write one problem caused by creating more districts in Uganda.

.....

48. (a) What do we call the movement of people to other countries for settlement?

.....
.....

b) Give any two reasons why people move to other countries for settlement.

i).....

ii)

c) How does the movement of people to other countries affect the development of Uganda?

.....

.....

49. (a) Name the hottest desert in Africa.

.....

(b) Write two causes of deserts in Africa.

i).....

ii)

(c) State the reason why deserts have cold nights.

.....

.....

50. (a) Who were Indian coolies?

.....

.....

(b) Give any one reason why the Uganda railway was constructed.

.....

.....

(c) How did the construction of the Uganda Railway promote colonial rule in East Africa.

.....

.....

For questions 51–55 answer either Christianity or Islamic but not both.

51. Either:

(a) Why did God put Adam in the garden of Eden?

.....
.....

(b) How did God punish Adam for failing to obey his commands?

.....
.....

(c) State any two benefits a child gets by obeying his/her parents.

i)
.....

i).....
.....

Or:

a) Why did Allah put Prophet Adam in the garden of Adam.

.....
.....

b) How did Allah punish Adam for failing to obey his commandments?

.....
.....

(c) Write any two benefits a child gets by obeying his parents.

i).....
.....

ii)
.....

52. Either:

(a) Name the person who is known for great endurance in Christianity.

.....
.....

b) State any two ways the person named in (a) above suffered due to his faith in God.

i).....

.....

ii)

.....

(c) Write one lesson Christians learn from the suffering of the person named in above.

.....
.....

Or: (a) Name the person who is known for great endurance in Islam

.....
.....

(b) State any two ways the person in (a) above suffered due to his faith in God

i).....

.....

ii)

.....

(c) Write one lesson Muslims learn from the person named in (a) above.

.....
.....

53. Either:

(a) Mention any two reasons why a Christian should fast.

i).....

.....

ii)

.....

(b) Give any two things a Christian should do to others in order to get blessing during fasting.

i).....

.....

ii)

.....

Or:

a) Mention any two reason why a Muslim should fast.

i).....

.....

ii)

.....

b) Give any two things a Muslim should do to others during fasting in order to get blessings from Allah.

i).....

.....

ii)

.....

54. Either:

(a) Who is a Saint according to Christianity?

i).....

.....

ii)

.....

(b) Name any one Christian saint in the Bible.

.....

(c) State any two ways Christians remember their saints.

i).....

.....

ii)

.....

Or:

a) Who is a saint according to Islam?

.....

.....

b) Name any one Muslim Saint.

.....

c) State any two ways Muslims remember their saints.

i).....

.....

ii)

.....

55. Either:

"I am the resurrection and life, whoever believes in me even when he dies, he will live" (John 11:25-27)

a) Who said the words in the quotation above?

.....

b) Whom were the words above said to?

.....

(c) Give any two lessons Christians learn from the quotation above.

i).....

.....

ii)

.....

Or:

"As your God is one" There is no god but Allah. Most gracious and Most merciful. (Quran 2:163)

a) Who said the words in the quotation above?

.....

b) Whom were the words above said to?

.....

Give any two lessons Muslims learn from the quotation above.

i).....

.....

ii)

.....

END

SECTION A: 40 MARKS

1. Give one importance of electricity to the industrial sector of Uganda.

.....
.....

2. How do people benefit in wetlands?

.....
.....

3. Name one organ commonly affected by alcohol.

.....
.....

4. Name the tool that is used to transplant seedlings.

.....
.....

5. State the difference between near drowning and drowning.

.....
.....

6. Give one cause of short circuits.

.....
.....

7. Name the immunizable water borne disease that affects muscles and nerves.

.....
.....

8. Where is honey stored in a modern bee hive?
.....
.....
9. How are incisor teeth adapted to their function?
.....
.....
10. Why are people encouraged to perform regular physical exercises?
.....
.....
11. Give one way of acquiring natural immunity besides recovering from sickness.
.....
.....
12. What enables red blood cells to transport oxygen around the body?
.....
.....
13. How is tropism important to plant?
.....
.....
14. State the importance of saliva in the process of digestion of proteins.
.....
.....
15. Identify the disease spread culex mosquito.
.....
.....

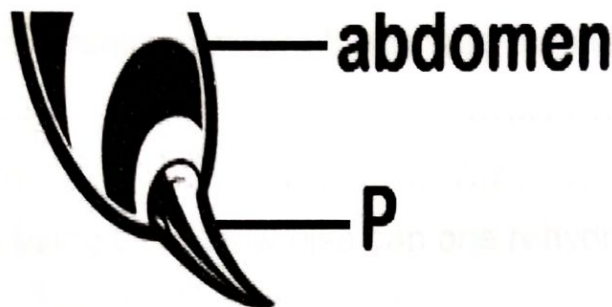
16. Apart from picking food, give any other way birds use their beaks.

.....
.....

17. Identify the first stage in a village food path.

.....

Study the diagram below and answer questions 18 and 19.



18. How the above structure is marked P important to bees?

.....
.....

19. Why does a bee die after using the above structure?

.....
.....

20. Mention one requirement for starting up a poultry project.

.....
.....

21. How is yeast different from most of the fungi in terms of reproduction?

.....
.....

22. Why do farmers castrate bulls?

.....

.....

23. Mention the element of PHC that enables our parent to space children.

.....

.....

24. How does quarantine prevent the spread of diseases in cattle?

.....

.....

25. Apart from using ORS, how else can one rehydrate the body?

.....

.....

26. What is meant by “Golden hour” as used in first aid?

.....

.....

27. In the space below draw a simple serrated leaf.

28. Why is distilled water not recommended for drinking?

.....

.....

29. How does application of oil stagnant water on control malaria?

.....
.....

30. How is a blubber useful to cetaceans?

.....
.....

31. How does a porcupine protect itself?

.....
.....

32. Give one similarity between light and sound as forms of energy?

.....
.....

33. Give one disadvantage of broadcasting method of planting.

.....
.....

34. State one way how weeds can be important to a farmer.

.....
.....

35. Give one characteristic of a soluble substance.

.....
.....

36. Why are invalids classified as vulnerable people?

.....
.....

37. What term is used to mean the bringing back of food to the mouth from the stomach for further chewing?

.....
.....

38. Mention the main product obtained from alpine goats.

.....

39. Mention one factor that can lead to absconding in bees.

.....
.....

40. How does heat travel through a vacuum?

.....
.....

SECTION B: 60 MARKS

41. a) What are chemical changes?

.....
.....

b) Give two examples of chemical changes.

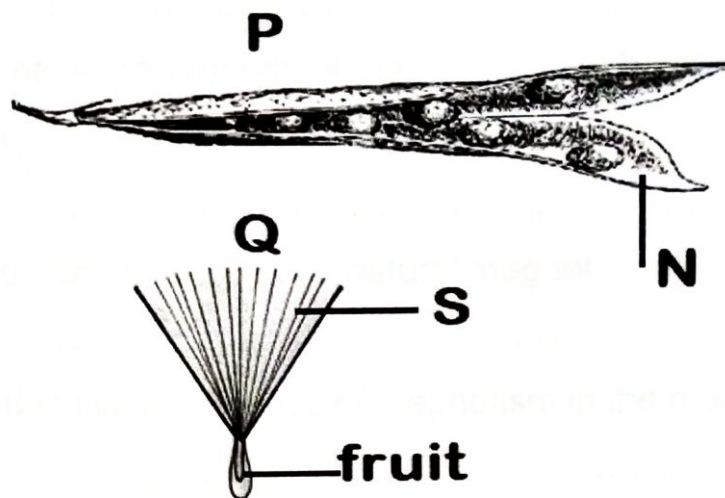
i).....

ii).....

c) Mention one characteristic of chemical changes.

.....
.....

42. Study the diagrams shown below and answer questions that follow.



- a) Identify the method of dispersal shown in P and Q above.

i).....
ii).....

- b) Name structure marked N in diagram P.

.....

- c) How are structures marked S useful to the fruit shown in Q?

.....
.....

43. a) State one danger of poor disposal of human wastes.

.....
.....

- b) Give two examples of water vector habitat diseases.

i).....
ii).....

- c) Mention one way of maintaining proper sanitation at home.

.....
.....

44. a) Mention the property of magnetism that helps us to detect direction.

.....

- b) Mention one example of a natural magnet.

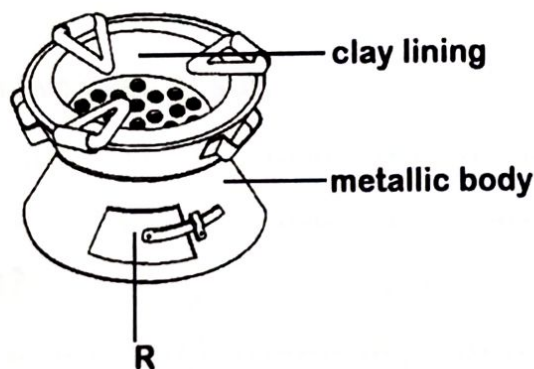
.....

- c) Mention two importance of magnetism in the modern world.

i).....

ii).....

45. Study the diagram below and answer questions that follow.



- a) Name the item shown above.

.....

- b) Why should part R be open when the item is working?

.....
.....

c) Why is the item said to be environmentally friendly?

.....
.....

d) Name the energy resource that enables the above item to work.

.....
.....

46. a) What do we call the upward movement of water through the soil?

.....
.....

b) Why is clay soil able to keep water longest?

.....
.....

c) Mention two uses of soil.

i)

ii)

47. a) What is heat?

.....
.....

b) Give two effects of heat on matter.

i).....

ii).....

c) How is heat useful in preservation of food?

.....
.....

48. a) Define the term "frequency" as used in sound.

.....
.....

b) Mention two factors that determine pitch in sound.

i).....

ii).....

c) How is sound used economically?

.....
.....

49. Study the table below and answer questions that follow

A	D	C	D
Snake	Wallaby	Salamander	Dove
Tortoise	Porcupine	Frog	Pigeon
Gecko	Seal	Newt	Owl
Skunk	Guinea pig	Toad	Cuckoo

a) Give one characteristic common to all the above animals.

.....
.....

b) How are animals A different from those in C in terms of reproduction?

.....
.....

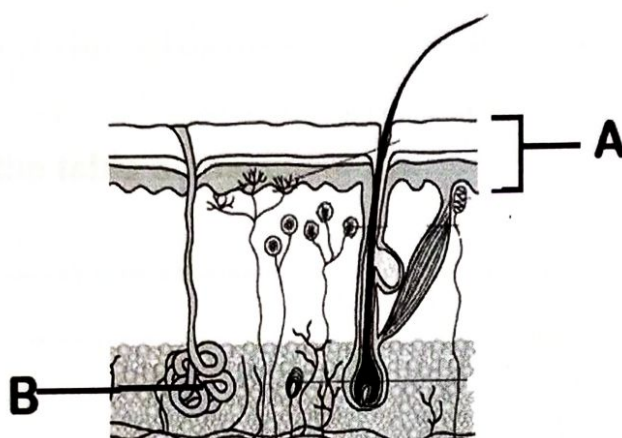
b) Name the class of vertebrates that is not represented above

.....
.....

d) Which characteristic would use to classify A and D in the same group

.....
.....

50. The diagram below shows a body organ. Use it to answer questions that follow.



a) Name parts A and B.

A.....

B.....

b) Give one excretory importance of the above organ.

.....
.....

c) How does the above organ regulate body temperature?

.....
.....

51. What are Narcotic drugs?

.....
.....

(b) Give one example of narcotic under the stimulant category of drugs.

.....
.....

c) State two dangers of narcotic drugs.

i).....

ii).....

52. Complete the table below correctly

Disease	Cause
Trachoma
.....	Salmonella typhi
.....	Sarcoptes scabiei
Malaria

53. (a) Name one breed of sheep that is good for wool production.

.....
.....

(b) Apart from wool, give one other product got from a sheep.

.....
.....

(c) Why docking in sheep rearing should be carried out in sheep rearing.

.....
.....

(c) Give one advantage of keeping records on a farm.

.....
.....

54 a) What is breast feeding?

.....
.....

c) Why is breast milk regarded as the best food for babies?

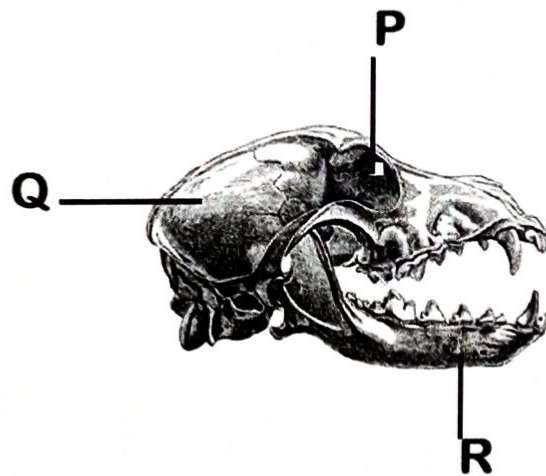
.....
.....

d) Mention two situations where breast feeding is regarded risky to the baby.

i).....

ii).....

55. The diagram below shows part of the mammalian skeleton. use it to answer questions that follow



a) Identify parts marked P and R

P.....

R.....

b) According to the diagram, mention one class of mammals the above skull belongs to

.....
.....

c) Give the reason to support your answer in (b) above

.....
.....

END

SECTION A: 50 MARKS

Questions 1 to 50 carry one mark each

Sub-section I

In each of the questions **1 to 8**, fill in the blank spaces with a suitable word or a group of words.

1. Ojakuba Bulungi does not know.....a plane looks like.
2.ewe is a female sheep.
3. Mr. Mwijukye thesells attractive flowers.
4. Vehicles could not move because there was.....traffic on the road.
5. Not only is the carpenter hardworking.....rich.
6. The suspect was finally charged.....defilement in the High court.
7. Primary Seven pupils did the homework by.....
8. To.....should we address the issue of children's rights?

In questions **9 to 15**, use the correct form of the word in the brackets to complete the sentence.

9. The late king was buried in his.....home. (ancestor)
10. Nakato is theof the twins. (old)
11. P.6 pupils have.....invitation letters to their friends. (write)
12. All the team players.....matched to the stadium. (quick)
13. Had they..... their work in time they would not have been punished. (do)
14. Farmers ought not to showin their animals. (cruel)
15. There were very a lot ofat the wedding reception.(waitress)

In questions **16** and **17**, arrange the given words in alphabetical order.

16. condolence , mourners, deceased , heir

.....
.....

17. rest, restaurant, resting, restaurateur

.....
.....

In questions **18 to 20**, rewrite the sentences giving a single word for the underlined group of words.

18. On our way to Malaba, we met a vehicle that carries dead bodies.

.....
.....

19. All the candidates enjoyed their first meal of the day.

.....
.....

20. The process of voting for prefects at our school is done in second term.

.....
.....

In questions **21 and 22**, use the given words in a sentence to show that you know the difference in their meaning.

21. peace

.....
.....

22. piece

.....
.....

In questions **23 to 25**, write the full forms of the following.

23. Rev.....
24. Who'd.....
25. UWEC.....

In questions **26 to 28**, rewrite the sentence giving the opposite of the underlined words

26. Joshua Cheptegei succeeded in getting a gold medal.
.....
.....
27. My grandmother lived a responsible life.
.....
.....
28. The lake was very calm at the time we were at the beach.
.....
.....

In questions **29 and 30**, give the plural form of the given words.

29. a table-cloth.....
30. vertex.....

Subsection II

In questions 31 to 50, rewrite the sentences as instructed in the brackets.

31. I am not a dog. I cannot eat these bones.

(Join as one sentence beginning: If.....)

.....
.....

32. The investor borrowed some money from the government.

(Re-write the sentence using:lent.....)

.....
.....

33. Who has broken my CD?

(Re-write the sentence beginning: By.....?)

.....
.....

34. Jinja S.S has bought a bus. The bus has sixty seats.

(Join as one sentence using:a sixty-seater.....)

.....
.....

35. Okot has made a very right decision.

(Re-write the sentence beginning: What.....)

.....
.....

36. It is a long way from Serere to Pakwach.

(Re-write the sentence using.....far.....)

.....
.....

37. The police officer told us, "This driver caused the accident recklessly."
(Re-write the sentence using:said that.....)

.....
.....

38. Harry does not have a thesaurus. Harry does not have a dictionary.
(Join as one sentence using:and neither.....)

.....
.....

39. It is ten years now since we last met.
(Re-write the sentence beginning: We haven't.....)

.....
.....

40. The porridge was very hot. They could not eat it.
(Join as one sentence using.....tooto.....)

.....
.....

41. I met a business man. I was going to the mosque.
(Re-write the sentence beginning: When.....)

.....
.....

42. Turn off the volume of the radio. I want to receive my call.
(Re-write the sentence using.....so that.....)

.....
.....

43. Laura hopes to excel in P.L.E.
(Re-write the sentence using.....looks forward.....)

.....
.....

44. That envelope consists of letters from my relatives.
(Re-write the sentence using:comprises.....)
.....
.....
45. When Musa tested positive for COVID19, he was admitted to Mengo Hospital. (Re-write the sentence beginning: Immediately.....)
.....
.....
46. Pollution and over grazing are a threat to the environment.
(Re-write the sentence using:as well as.....)
.....
.....
47. The crowd three times. Peter denied Jesus.
(Rewrite as one sentence beginning: By the time.....)
.....
.....
48. Mariamungu rears cattle. He also rears poultry.
(Join as one sentence beginning: Besides.....)
.....
.....
49. Lugose bought a stool. The chair is nice. It is made of wood. It is huge.
(Join as one sentence without using that, which or and)
.....
.....
50. Where can I find a television station the stranger asked
(Punctuate this sentence correctly)
.....
.....

SECTION B: 50 MARKS

Questions 51 to 55 carry 10 marks each

51. The dialogue below took place Dorah and a police officer. What the police officer said has been given. Write what you think Dorah responded in full sentences.

Police officer: Good morning; young girl.

Dorah:.....

Police officer: What is your name?

Dorah:.....

Police Officer: Angoli Dorah! Why are you crying?

Dorah:.....

Police Officer: Where were going when you lost your way?

Dorah:.....

Police Officer: Why were you going to Nsambya this morning?

Dorah:.....

Police Officer: Visiting your friend Dinah won't be a problem. Don't you have any of your elder siblings who could accompany you?

Dorah:.....

Police officer: Being the only child in family also has its advantages. Are you able to cross the road alone?

Dorah:.....

Police officer: If you are not able, let me take you to the zebra crossing?

Dorah:.....

Police officer: That is a good question. A zebra crossing a place where pedestrians cross the road safely. Let's go and I show you where it is.

Dorah:.....

Police officer: You are welcome, Dorah. There it is. You can now cross with ease and have a safe journey.

Dorah:.....

52. A) Read the invitation card below carefully and answer the questions that follow in full sentences.

GRADUATION CEREMONY

Mr and Mrs Mbazira of Kalori Lyantonde with great pleasure invite the company of

Ms. Namata Jesca

to their graduation party of their daughter Namugyenyi Martina which will take place at their home in Kalori on 30th September 2022 beginning at midday.

You presence will grace the occasion

R.S.V.P

Mbazira Moses 0782394929

- a) Who is being invited to the party?

.....
.....

- b) When will the ceremony take place?

.....
.....

- c) Where will the party take place?

.....
.....

- d) What is the relationship between Namata Jesca and Mr. and Mrs. Mbazira?

.....

- e) Write R.S.V.P in full.....

52. B) Read the notice below carefully and answer the questions in full sentences.

The office of District Veterinary Officer, Omoro District hereby informs all farmers in Omoto zone that veterinary doctors will conduct a vaccination exercise in the areas as shown below.

DAY	TIME	ANIMAL	DISEASE
Monday 16/05/2022	8:00a.m-12noon	Cattle	Foot and mouth
Tuesday 17/05/2022	8:00a.m-10:00a.m	Dogs	Rabies
Wednesday 18/05/2022	8:00a.m- 3:00p.m	Pigs	Swine fever
Friday 20/05/2022	11:00a.m- 1:00p.m	Rabbits	Coccidiosis
Please keep time			

a) Who is being informed?

.....

b) How many diseases will be vaccinated during this exercise?

.....

c) From which office is this notice?

.....

d) At what time will the exercise end on Monday?

.....

e) Why do you think they are carrying out vaccination in this zone?

.....

54. Read the poem below carefully and then answer the questions that follow in full sentences.

Blessed, I am the mechanic
That four **motorists** found me at the garage recently
With their vehicles in dangerous mechanical condition
I need of repair.

The first vehicle was critically damaged in an accident
While the second had a faulty engine
That needed **thorough** check up
The other two vehicles had broken windscreens
That needed to be replaced with new ones.

This all I did with ease
And I was promptly paid at the end
The money I used
To buy not only food for my family
But also other home **necessities**
Hence going back home happily.
Samson .K

a) What is the poem about?

.....
.....

b) How many vehicles were brought to the mechanic?

.....
.....

c) Why were the vehicles taken to the garage?

.....
.....

53. The sentences below are in a wrong order rewrite them in a correct order to make a good composition about **elections** in Uganda.

- a) The elections are categorized in three groups.
- b) They include Presidential, Parliamentary and Local Council elections.
- c) This is a very simple question to answer.
- d) After one has fulfilled all the requirements, one is free to stand and be nominated for any post of one's choice.
- e) One of them is that such a candidate must be a Ugandan citizen, a registered voter and with "A" Level qualification.
- f) However, there are some required qualifications for each of the above categories.
- g) Why is Uganda considered a democratic country?
- h) One of the reasons is that it holds elections after a period of five years.
- i) After nomination, candidates start campaigns.
- j) After campaigns, elections are held and the winner assumes office after swearing-in.

.....

.....

.....

.....

.....

.....

.....

.....

.....

.....

.....

.....

.....

.....

.....

d) What happened to the second vehicle?

.....
.....

e) In which condition was the first vehicle?

.....
.....

f) According to the poem, how did the mechanic do this work?

.....
.....

g) How many stanzas does this poem have?

.....
.....

h) Why did the mechanic go back home happily?

.....
.....

i) Give a word or group of words to mean the same as the underlined words in the poem.

i) motorists.....

ii) thorough.....

[illegible]

14